


3.G Representing Half of a Circle


Task

For each picture, decide whether one half of the circle is shaded or not. Explain how you know.


a.




b.



c.



d.



3.G Representing Half of a Circle
Typeset May 4, 2016 at 22:45:32. Licensed by Illustrative Mathematics under a
Creative Commons Attribution-NonCommercial-ShareAlike 4.0 International License .