
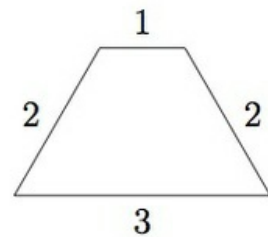
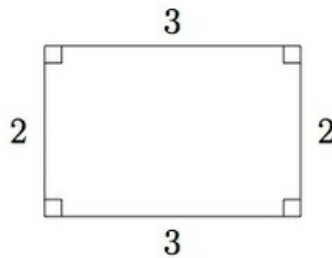
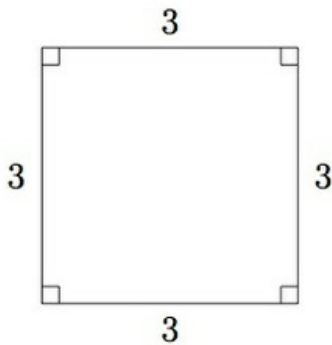


4.G Lines of symmetry for quadrilaterals

Task

Below are pictures of four quadrilaterals: a square, a rectangle, a trapezoid and a parallelogram.



For each quadrilateral, find and draw all lines of symmetry.



Symmetry for quadrilaterals

Typeset May 4, 2016 at 22:47:51. Licensed by Illustrative Mathematics under a Creative Commons Attribution-NonCommercial-ShareAlike 4.0 International License .