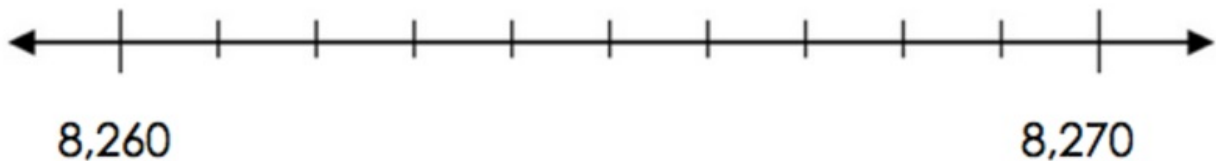


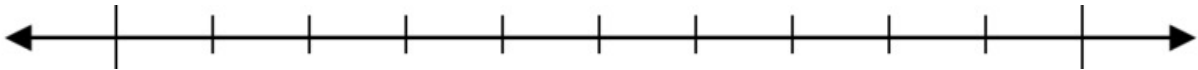
4.NBT Rounding on the Number Line

Task

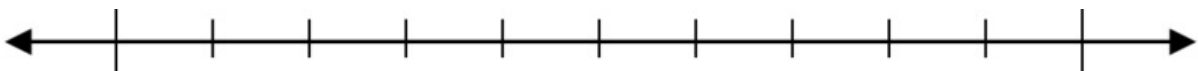
a. The number 8,263 lies between 8,260 and 8,270 on the number line. Label all the other tick marks between 8,260 and 8,270. Is 8,263 closer to 8,260 or 8,270 on the number line?



b. Which hundred is 8,263 nearest to on the number line? Plot 8,200 and 8,300 on the two outermost spots on the number line below. Then plot 8,263 to prove your answer.



c. Which thousand is 8,263 nearest to on the number line? Plot 8,000 and 9,000 on the two outermost spots on the number line below. Then plot 8,263 to prove your answer.





4.NBT Rounding on the Number Line
Typeset May 4, 2016 at 23:19:06. Licensed by Illustrative Mathematics under a
Creative Commons Attribution-NonCommercial-ShareAlike 4.0 International License .