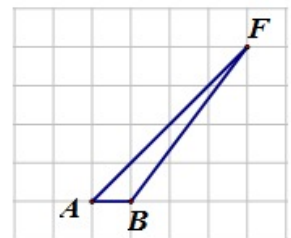
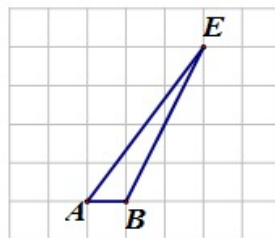
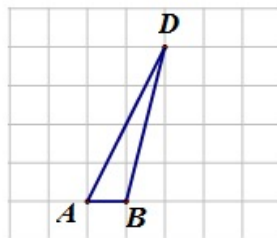
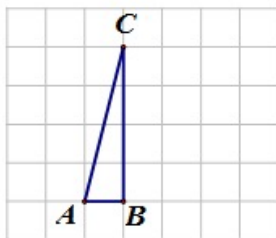


6.G Same Base and Height, Variation 2

Task

Which of the triangles, $\triangle ABC$, $\triangle ABD$, $\triangle ABE$ or $\triangle ABF$, has the largest area?



- a. $\triangle ABC$
- b. $\triangle ABD$
- c. $\triangle ABE$
- d. $\triangle ABF$
- e. They all have the same area
- f. There is not enough information to answer.

