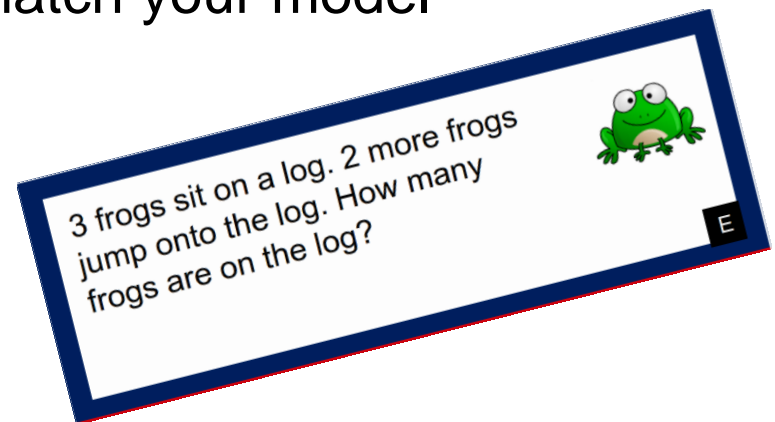


# Add To: Result Unknown (within 10)

**Materials:** Add To: Result Unknown (within 10) word problem cards


---

1. Solve the word problems. For each card:
  - a) read the problem with a partner
  - b) use objects or drawings to model the problem
  - c) write a number sentence to match your model
2. Check your work with a partner.



**Add To: Result Unknown (within 10)**

Jack has 5 toy dinosaurs. For his birthday Jack gets 1 more dinosaur. How many dinosaurs does Jack now have?



**A**

4 taxis stop outside a school. 1 more taxi stops at the school. How many taxis stop at the school?



**B**

Mike has 6 toy helicopters. His dad gives him 1 more toy helicopter. How many toy helicopters does Mike now have?



**C**

7 goats walk over a bridge. 1 more goat walks over the bridge. How many goats walk over the bridge in all?



**D**

3 frogs sit on a log. 2 more frogs jump onto the log. How many frogs are on the log?



E

4 ladybugs sit on a leaf. 2 more ladybugs fly onto the leaf. How many ladybugs are on the leaf?



F

Dad catches 5 fish. Then he catches 2 more fish. How many fish does dad catch in all?



G

6 girls are playing soccer. 2 boys join them. How many children are playing soccer?



H

Jack sees 4 school buses in the parking lot. 3 more buses drive into the parking lot. How many buses are in the parking lot?




I

5 boys are playing basketball. 3 more boys come to play. How many boys are playing basketball?



J

6 stars shine in the night sky. 3 more stars begin to shine. How many stars are shining in the night sky?



K

Dad picks 3 red apples from a tree. Then he picks 3 green apples. How many apples does dad pick in all?



L

Jake picks 6 tomatoes. Then he picks 4 more tomatoes. How many tomatoes does Jake pick in all?



M  
I

5 ladybugs are on a leaf. 4 more ladybugs fly onto the leaf. How many ladybugs are on the leaf?



N

4 parrots are sitting on a branch. 4 more parrots land on the branch. How many parrots are on the branch?



O

Maribel cuts 2 slices of birthday cake. Then she cuts 4 more slices. How many slices of birthday cake does Maribel cut in all?



P